

Exercice 1

Compléter :

▶1. $\frac{81\ 550}{\dots} = 8,155$

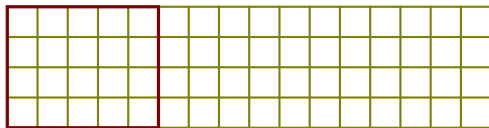
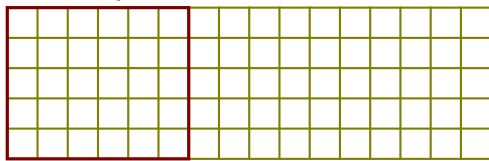
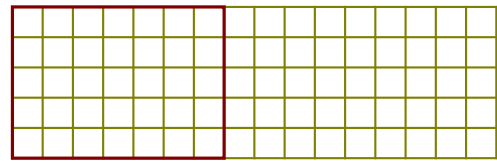
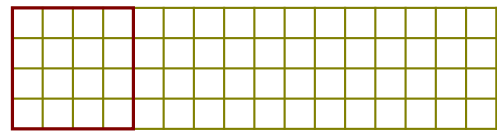
▶2. $\frac{8\ 994}{100} = \dots$

▶3. $\frac{6\ 585}{\dots} = 65,85$

▶4. $\frac{\dots}{100} = 844,9$

▶5. $\frac{\dots}{10} = 288,8$

▶6. $\frac{\dots}{100} = 29,99$

Exercice 2▶1. Colorer $\frac{13}{10}$ de ce rectangle.▶2. Colorer $\frac{4}{3}$ de ce rectangle.▶3. Colorer $\frac{6}{7}$ de ce rectangle.▶4. Colorer $\frac{3}{4}$ de ce rectangle.**Exercice 3**

▶1. Compléter :

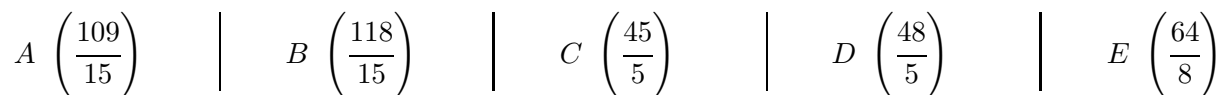
a) 1 unité = ... quinzièmes

b) 1 unité = ... cinquièmes

c) 6 unités = ... quinzièmes

d) 6 unités = ... cinquièmes

▶2. Sur la demi-droite ci-dessous, placer les points d'abscisse donnée :



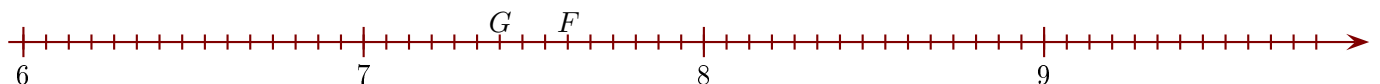
▶3. Compléter les abscisses des points suivants :

a) $F \left(\frac{\dots}{15} \right)$

b) $F \left(\frac{\dots}{5} \right)$

c) $G \left(\frac{\dots}{15} \right)$

d) $G \left(\frac{\dots}{5} \right)$

**Exercice 4**

Compléter :

▶1. $\frac{60\ 730}{100} = \dots$

▶2. $\frac{\dots}{10\ 000} = 7,048$

▶3. $\frac{\dots}{1\ 000} = 45,2$

▶4. $\frac{22\ 990}{\dots} = 2,299$

▶5. $\frac{\dots}{10\ 000} = 7,02$

▶6. $\frac{61\ 010}{\dots} = 61,01$